

**ADMISSION 2021**

**Sample Paper C for Grade II**

**Q1. Read the story and answer the questions in complete sentences.  
What if....?**

Zara sat on the blue steps of her house. She was wondering..... What if jelly beans made you jump really high? You could get to school in one big leap! What if houses were rocket ships? Your family could go holidays to moon! What if the pictures in books flew around your head when Dad read to you? What if my pink gumboots were magical? I could run faster than my big brother! “Zara, what are you doing?” Asked Zara’s big brother. Zara sat back on the step with a big smile on her face. “just wondering,” she said.

**Answer the Questions:**

**1. What Zara was wondering about the jelly beans?**

---

---

**2. What do you wonder when Dad read to you?**

---

---

**3. “Zara what are you doing”? Who said that?**

- a) Mum                      b) Big brother                      c) Dad

**5. What if the flowers could talk? What would they say?**

---

---

**6. Use any of these words in your sentences: flew or wonder**

---

---

**Generation's School**

*... a happy place to learn*

**Q2. Write a paragraph of 7 – 10 sentences around any one of the given topics.**

‘ How I celebrated Eid ul Adha’

or

‘My School’

---

---

---

---

---

---

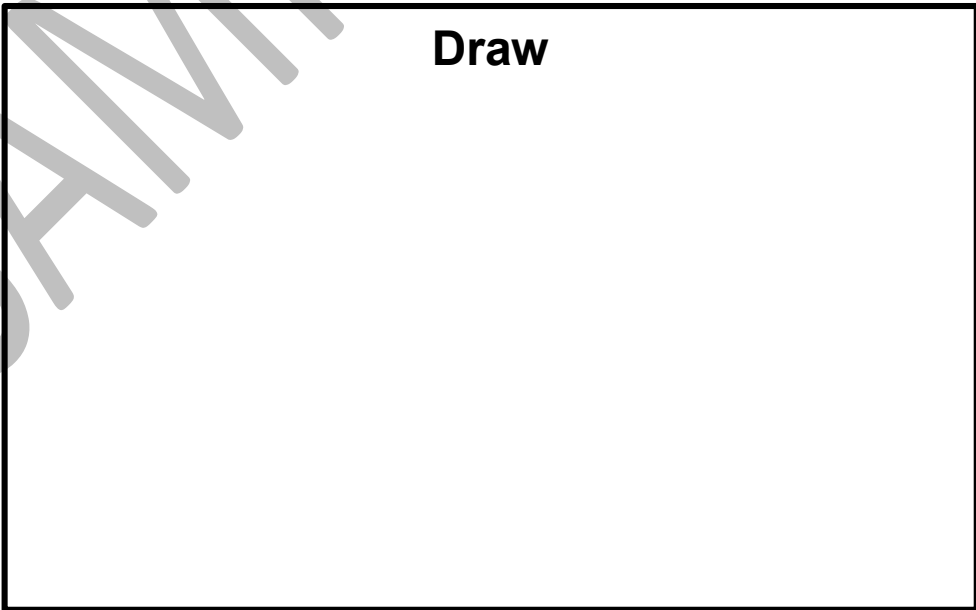
---

---

---

---

**Draw**



**Q3. Fill in the blank with correct option:**

1. Ayesha \_\_\_\_\_ ( receive, received) a call.
2. Her aunt told, “Sara and Zara \_\_\_\_\_ coming to Karachi”. ( is, are, were).
3. She excitedly \_\_\_\_\_ (run, ran, running) to \_\_\_\_\_ (her, his) mother.
4. Mother was coming \_\_\_\_\_ (down, up) the stairs.

**Q4. Punctuate the given sentence.**

ali called me ahmed to inquire about his health.

Q1. Circle the correct answer.

1. What is 5 more than 4 fours

- a) 16                      b) 21                      c) 18

2. 10 less than 86 is

- a) 56                      b) 76                      c) 96

3. Which solid shape rolls in a straight path

- a) cone                      b) cylinder                      c) sphere

4. A boy throws three dices. Each shows a 6. The total score is:


- a) 20                      b) 19                      c) 18

5. What should be added to 460 to make it 500

- a) 40                      b) 50                      c) 60

6. What fraction of shape is shaded

- a)  $\frac{3}{8}$                       b)  $\frac{5}{8}$                       c)  $\frac{8}{3}$



7. How many right angles a rectangle has?

- a) 2                      b) 3                      c) 4

8. Which holds the most?



# Generation's School


... a happy place to learn

9.  $2\frac{1}{2}$  m can also written as

- a) 200 cm      b) 250 cm      c) 225 cm

10. The time shown in the clock.

- a) a quarter past 3  
b) a quarter to 3  
c) a quarter to 4



**Q2. Solve:**

H	T	U	H	T	U	H	T	U	
5	0	0	2	1	2	1	0	4	
-	3	2	9	+	1	3	9	x	3
_____			_____			_____			
_____			_____			_____			

**Q3. There are 348 girls and 605 boys in a school. How many more boys are there than girls?**

H	T	U

\_\_\_\_\_

\_\_\_\_\_


\_\_\_\_\_

Answer statement: \_\_\_\_\_

\_\_\_\_\_

\_\_\_\_\_

# موسم "بارش"



★ تصویر غور سے دیکھیے اور اس کے بارے میں پانچ جملے تحریر کیجیے۔

---

---

---

---

---

جینیئریشن اسکول

تاریخ:

نام:

عبارت پڑھ کر جوابات تحریر کیجئے۔

پانی اللہ کی نعمت ہے اور ہر جاندار کے لیے بہت ضروری ہے۔ اچھی صحت کے لیے ضروری ہے کہ ہم چھ سے آٹھ گلاس پانی روزانہ پیئیں۔ ہمارا فرض ہے کہ ہم پانی ضائع نہ کریں اور سب کو اس کی تلقین کریں۔

۱۔ عبارت میں اللہ کی کس نعمت کا ذکر ہے؟

جواب:

۲۔ اچھی صحت کے لیے کتنا پانی پینا چاہیے؟

جواب:

۳۔ ہمیں دوسروں کو کیا تلقین کرنی چاہیے؟

جواب:

۴۔ آپ پانی کیسے بچاتے ہیں؟

جواب: